



EASTERN UNIVERSITY, SRI LANKA

FIRST YEAR FIRST SEMESTER EXAMINATION IN SCIENCE

2016/2017 (AUGUST/ SEPTEMBER 2018)

CH 1013 PRINCIPLES OF CHEMISTRY - I

Answer all questions

Time: 03 hours

Gas constant ( $R$ ) =  $8.314 \text{ J mol}^{-1} \text{ K}^{-1}$      $2.303 \frac{RT}{F} = 0.0591 \text{ V}$     Faraday constant ( $F$ ) =  $96500 \text{ C mol}^{-1}$

Plank's constant ( $h$ ) =  $6.63 \times 10^{-34} \text{ Js}$ , Velocity of light ( $C$ ) =  $3 \times 10^8 \text{ ms}^{-1}$ , Mass of electron =  $9.1 \times 10^{-31} \text{ kg}$ ,  
 $\epsilon_0 = 8.854 \times 10^{-12} \text{ C}^2 \text{ N}^{-2} \text{ m}^{-2}$ ,  $e = 1.602 \times 10^{-19} \text{ C}$ ,  $1 \text{ eV} = 1.6 \times 10^{-19} \text{ J}$

1) a) Define the following terms.

i) Extensive properties    ii) Adiabatic process

(10 marks)

b) i) Write the mathematical expression for the first and second laws of thermodynamics.

ii) 2 moles of an ideal gas ( $C_v = 2.5 R$ ) is maintained in a volume of  $11.2 \text{ dm}^3$  at  $273 \text{ K}$ . The temperature of the gas is raised to  $373 \text{ K}$ . Calculate  $w$ ,  $\Delta U$ ,  $q$ , and  $\Delta H$  at constant volume

iii) Calculate the work done for an isothermal reversible expansion of 3 moles of Hydrogen gas from volume  $2 \text{ dm}^3$  to  $100 \text{ dm}^3$  at  $273 \text{ K}$ , which obeys to the equation of state  $P(v - \beta) = nRT$  where  $\beta$  is a constant and its value is  $0.015 \text{ dm}^3$ .

(50 marks)

Contd.

- c) i) Using the first and second laws of thermodynamics *show that the entropy change* on heating of 'n' moles of substance reversibly from temperature  $T_1$  to  $T_2$  at constant volume is,

$$\Delta S = C_v \ln \left( \frac{T_2}{T_1} \right)$$

Assume that  $C_v$  is independent of temperature.

- ii) Calculate the entropy change ( $\Delta S$ ) of 2 moles of an ideal gas ( $C_v = 2.5 R$ ) at constant volume heated to  $127^\circ \text{C}$

- d) Show that the following auxiliary relations for a reversible process.

i)  $dA = -SdT - PdV$

ii)  $dH = TdS + VdP$

- 2) a) i) By using  $A = A(V, T)$ , derive the Maxwell relation


$$\left( \frac{\partial S}{\partial V} \right)_T = \left( \frac{\partial P}{\partial T} \right)_V$$

- iii) Using the above Maxwell relation, derive the thermodynamic equation of state

$$\left( \frac{\partial U}{\partial V} \right)_T = T \left( \frac{\partial P}{\partial T} \right)_V - P \quad (\text{Hint: } dU = TdS - PdV)$$

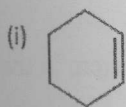
- iii) Show that for an ideal gas  $\left( \frac{\partial U}{\partial V} \right)_T = 0$

- b) The following redox reaction occurs in a cell:



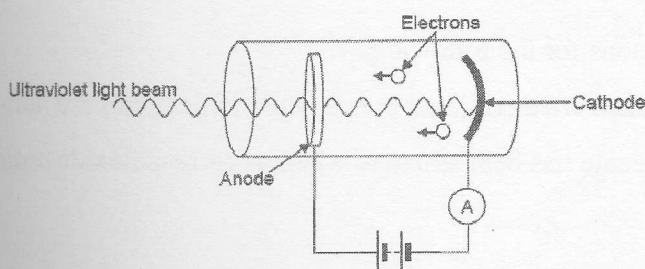
- i) Write the half-cell reactions.  
 iii) Represent the electrochemical cell  
 iv) Calculate the standard electrode potential  $E_{\text{cell}}^\circ$  for this cell at 298 K.  
 v) Calculate the change in standard Gibbs free energy ( $\Delta G^\circ$ ) at 298 K.  
 ( $E_{\text{Mg}^{2+}, \text{Mg}}^\circ = -2.37 \text{ V}$ ,  $E_{\text{Sn}^{2+}, \text{Sn}}^\circ = -0.14 \text{ V}$ )

e) Predict the product(s) obtained from addition of singlet dichlorocarbene ( $\text{Cl}_2\text{C:}$ ) to each of the following compounds



(20 Marks)

5 a) The photo-electric effect has many practical applications. A photocell, such as the one below used in burglar alarm systems.



Ultraviolet light of wavelength 100 nm is used to illuminate the photocell. When a person interrupts the ultraviolet beam, the sudden drop in current activates a switch, which sets off the alarm.

i) Define the terms 'threshold frequency', 'work function' and 'photoelectric effect'.

ii) The work function of the metal used as a cathode in the photocell is  $8.7 \times 10^{-19}$  J.

Calculate the velocity at which the electrons are emitted.

iii) What conclusion about the nature of light is drawn from the photoelectric effect?

(30 marks)

b) Briefly describe the following,

i) Fajan's rules for chemical bonding

ii) Non-valence cohesive forces

iii) Dalton's atomic theory

(30 marks)

c) Briefly explain the postulates of Bohr Theory?

(20 marks)

Contd.



d) What does Heisenberg's uncertainty principle say about an electron in an atom?

6 a) Write the four quantum numbers for each of seven electrons in nitrogen atom in the ground state.

b) Describe the bonding in  $\text{CH}_3^+$  using the valence-bond theory.

c) Explain the reasons for the following,

(i) Covalent bonds are directional bonds while ionic bonds are non-directional.

(ii) Water molecule has bent structure whereas carbon dioxide molecule is linear.

d) The following questions pertain to the nitric oxide (NO) molecule,

i) Draw the molecular orbital energy diagram for this molecule. Label orbitals specifically.

ii) Write the molecular electron configuration for the molecule

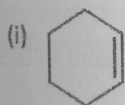
iii) Indicate whether the species is paramagnetic or diamagnetic

iv) Determine the bond order for the molecule

v) Compare the relative stability of this molecule to  $\text{NO}^+$  and  $\text{NO}^-$

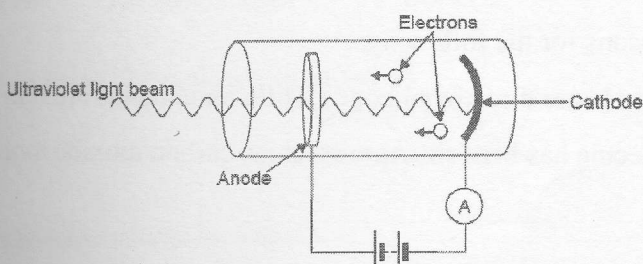
*End of paper*

e) Predict the product(s) obtained from addition of singlet dichlorocarbene ( $\text{Cl}_2\text{C:}$ ) to each of the following compounds



(20 Marks)

5 a) The photo-electric effect has many practical applications. A photocell, such as the one below used in burglar alarm systems.



Ultraviolet light of wavelength 100 nm is used to illuminate the photocell. When a person interrupts the ultraviolet beam, the sudden drop in current activates a switch, which sets off the alarm.

i) Define the terms 'threshold frequency', 'work function' and 'photoelectric effect'.

ii) The work function of the metal used as a cathode in the photocell is  $8.7 \times 10^{-19}$  J.

Calculate the velocity at which the electrons are emitted.

iii) What conclusion about the nature of light is drawn from the photoelectric effect?

(30 marks)

b) Briefly describe the following,

i) Fajan's rules for chemical bonding

ii) Non-valence cohesive forces

iii) Dalton's atomic theory

(30 marks)

c) Briefly explain the postulates of Bohr Theory?

(20 marks)

Contd.

- d) What does Heisenberg's uncertainty principle say about an electron in an atom?
- 6 a) Write the four quantum numbers for each of seven electrons in nitrogen atom in the ground state.
- b) Describe the bonding in  $\text{CH}_3^+$  using the valence-bond theory.
- c) Explain the reasons for the following,
- Covalent bonds are directional bonds while ionic bonds are non-directional.
  - Water molecule has bent structure whereas carbon dioxide molecule is linear.
- d) The following questions pertain to the nitric oxide (NO) molecule,
- Draw the molecular orbital energy diagram for this molecule. Label orbitals specifically.
  - Write the molecular electron configuration for the molecule
  - Indicate whether the species is paramagnetic or diamagnetic
  - Determine the bond order for the molecule
  - Compare the relative stability of this molecule to  $\text{NO}^+$  and  $\text{NO}^-$

*End of paper*